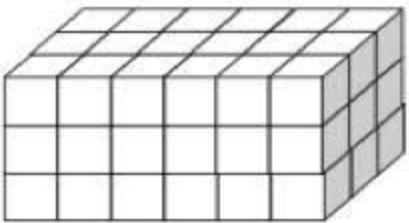
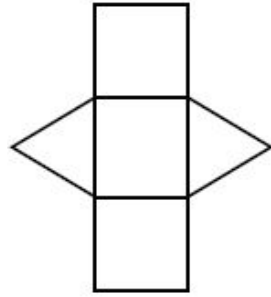
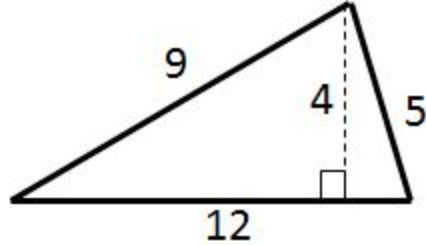
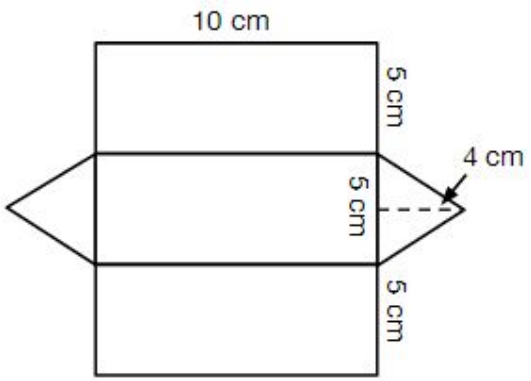
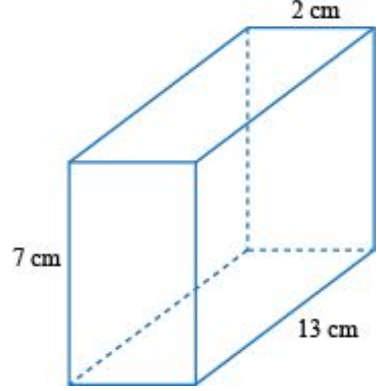


Weekly HW 5

Show your work for each of the following problems.

This Homework is due on or before FRIDAY.

M:	<p style="text-align: center;">Draw a net for a cube.</p>	<p style="text-align: center;">A parallelogram has a base of 7 inches and has an area of 35 square inches.</p> <p>1) What is the height for this parallelogram? 2) Draw and label a sketch of this parallelogram.</p>
T:	<p style="text-align: center;">Find the surface area.</p> <div style="text-align: center;">  </div>	<p style="text-align: center;">What 3D shape does this make?</p> <div style="text-align: center;">  </div>
W:	<p>List three (3) characteristics of a pyramid.</p> <p>1) 2) 3)</p>	<p style="text-align: center;">Find the area of this triangle.</p> <div style="text-align: center;">  </div>
Th:	<p style="text-align: center;">Find the surface area of this net.</p> <div style="text-align: center;">  </div>	<p style="text-align: center;">Find the surface area of this rectangular prism.</p> <div style="text-align: center;">  </div>

--	--	--